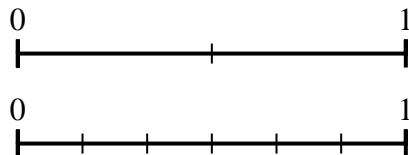




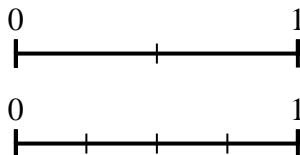
Use the number lines to answer the questions.

Answers

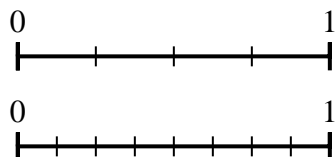
- 1) Using the number lines shown, what is the equivalent fraction to $\frac{2}{2}$?



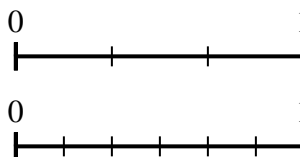
- 2) Using the number lines shown, what is the equivalent fraction to $\frac{2}{2}$?



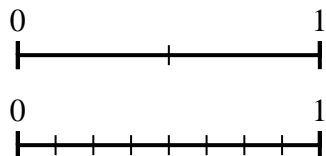
- 3) Using the number lines shown, what is the equivalent fraction to $\frac{4}{4}$?



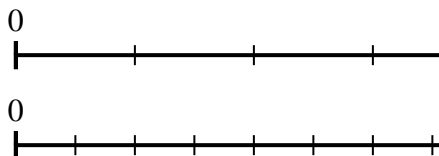
- 4) Using the number lines shown, what is the equivalent fraction to $\frac{1}{3}$?



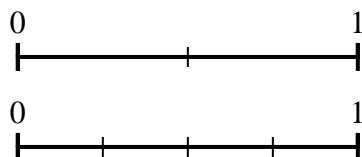
- 5) Using the number lines shown, what is the equivalent fraction to $\frac{1}{2}$?



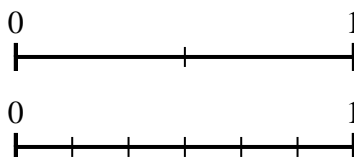
- 6) Using the number lines shown, what is the equivalent fraction to $\frac{3}{4}$?



- 7) Using the number lines shown, what is the equivalent fraction to $\frac{1}{2}$?



- 8) Using the number lines shown, what is the equivalent fraction to $\frac{1}{2}$?

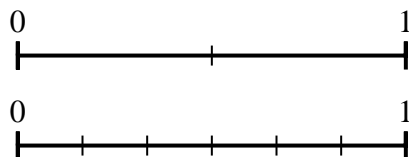


1. _____
2. _____
3. _____
4. _____
5. _____
6. _____
7. _____
8. _____

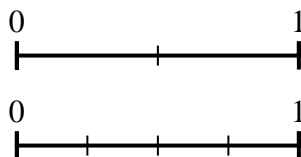


Use the number lines to answer the questions.

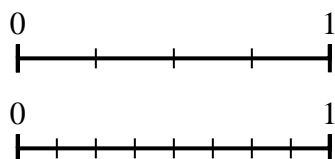
- 1) Using the number lines shown, what is the equivalent fraction to $\frac{2}{2}$?



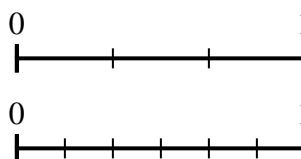
- 2) Using the number lines shown, what is the equivalent fraction to $\frac{2}{2}$?



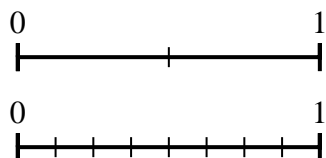
- 3) Using the number lines shown, what is the equivalent fraction to $\frac{4}{4}$?



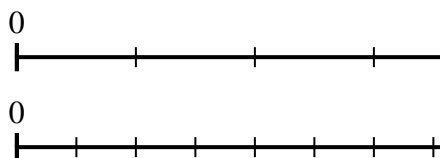
- 4) Using the number lines shown, what is the equivalent fraction to $\frac{1}{3}$?



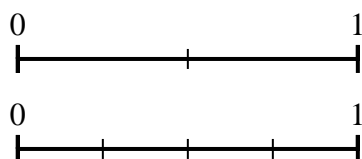
- 5) Using the number lines shown, what is the equivalent fraction to $\frac{1}{2}$?



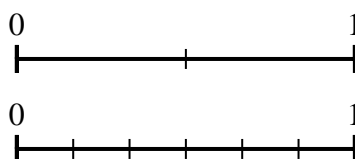
- 6) Using the number lines shown, what is the equivalent fraction to $\frac{3}{4}$?



- 7) Using the number lines shown, what is the equivalent fraction to $\frac{1}{2}$?



- 8) Using the number lines shown, what is the equivalent fraction to $\frac{1}{2}$?

**Answers**

1. $\frac{6}{6}$
2. $\frac{4}{4}$
3. $\frac{8}{8}$
4. $\frac{2}{6}$
5. $\frac{4}{8}$
6. $\frac{6}{8}$
7. $\frac{2}{4}$
8. $\frac{3}{6}$